

Unit 2, Station 3, Round 1, Task 2




Fraction, Decimal

Name: **Answer Key**

Ans


Determine the value written as a fraction , decimal

Ex)



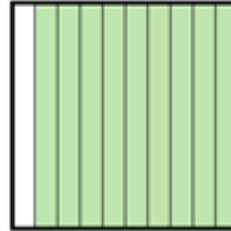
Fraction $\frac{64}{100}$
Decimal 0.64

1)




Fraction $\frac{8}{10}$
Decimal 0.8

2)




Fraction $\frac{9}{10}$
Decimal 0.9

3)



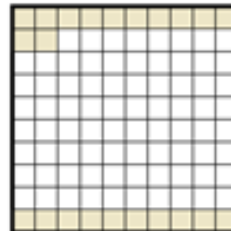
Fraction $\frac{68}{100}$
Decimal 0.68

4)




Fraction $\frac{10}{100}$
Decimal 0.10

5)



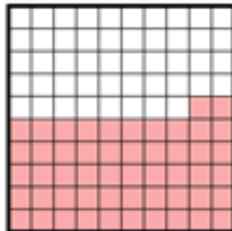
Fraction $\frac{22}{100}$
Decimal 0.22

6)




Fraction $\frac{28}{100}$
Decimal 0.28

7)



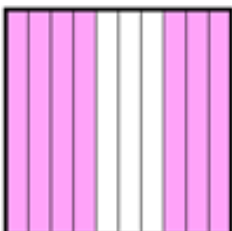
Fraction $\frac{52}{100}$
Decimal 0.52

8)



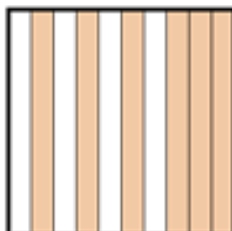
Fraction $\frac{5}{10}$
Decimal 0.5

9)



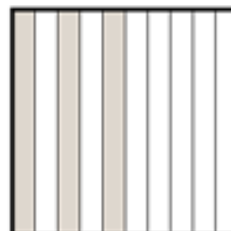
Fraction $\frac{7}{10}$
Decimal 0.7

10)



Fraction $\frac{6}{10}$
Decimal 0.6

11)



Fraction $\frac{3}{10}$
Decimal 0.3